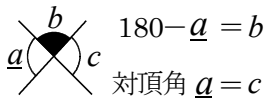


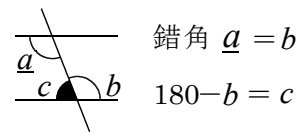
×印の問題

基本姿勢 1



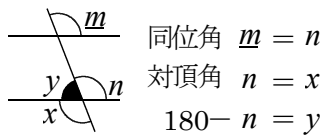
2直線の内側の角の問題

基本姿勢 2



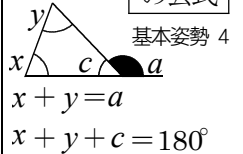
上下で同じ位置の角の問題

基本姿勢 3

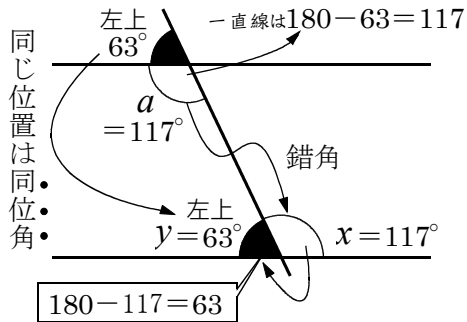
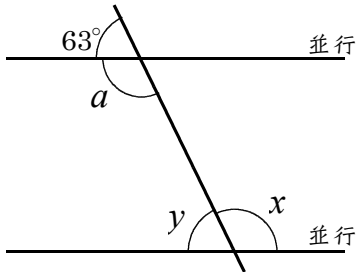


三角形の外角

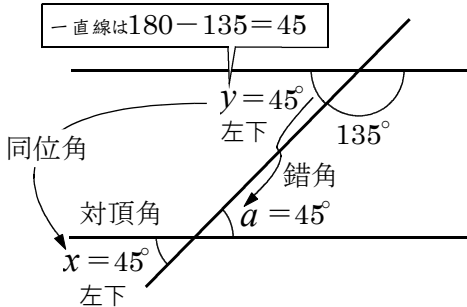
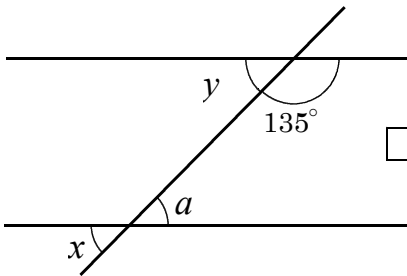
の公式



例題 1

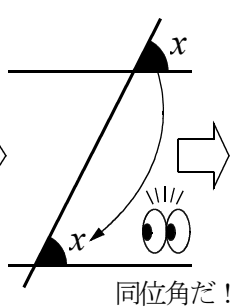
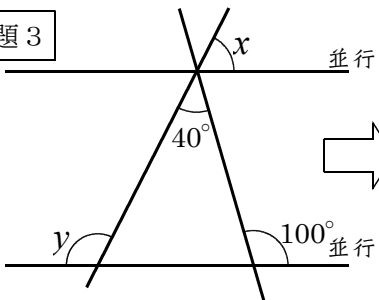


例題 2

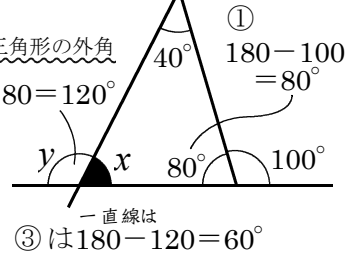


気づいて！置き換えて！求まるところは求めて！基本姿勢計算だ！

例題 3



② yは三角形の外角  
 $40 + 80 = 120^\circ$



例題 4

